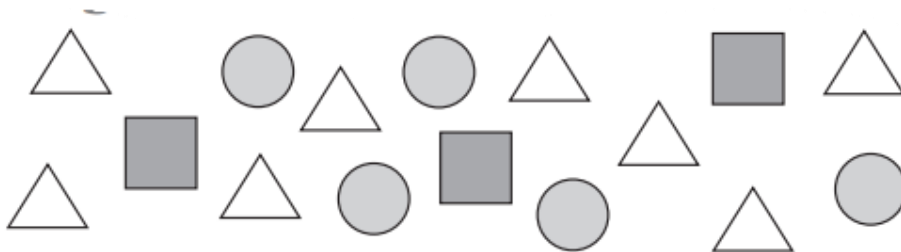


Today you are learning about pictograms.




You can watch a video by Oak Academy. Another teacher will explain for you.

<https://classroom.thenational.academy/lessons/representing-and-interpreting-data-using-a-pictogram-64r66c>


Now you are ready to complete today's activity. You can print this or draw your chart and pictogram in your book (Use a ruler)



a) Tally these shapes.

Shape	Tally	Number
		
		
		

b) Draw a pictogram for the shapes.

Each  represents 1 shape.

This is called a **key**. It tells us what each picture is worth.

Shape	Number
circle	
square	
triangle	

Make sure your crosses line up in each row as it will be easier to compare the data.

Use the given words to tell your friend how to complete a pictogram.

draw make match count

- First, _____ the tally marks.
-
- Next, _____ pictures to _____ the tally marks.
-
- Finally, _____ a key.