

Today you are learning more about pictograms

Watch the video then complete the activities below.

You can draw the tally chart and pictogram in your book if you cannot print the worksheet (use a ruler)

<https://youtu.be/543DVjV0d1I>

1 a) Jack has four types of sticker.

Complete the tally chart.



Sticker	Tally	Number
sun ☀		
smiley face 😊		
rainbow 🌈		
star ★		

b) Complete the pictogram to show Jack's stickers.


Each ○ represents 2 stickers.



Sticker	Number of stickers
sun ☀	
smiley face 😊	
rainbow 🌈	
star ★	

What title could you give the pictogram?

Use the clues to complete the pictogram.



Each  represents 10 goals.

Goals scored	Number
Kira	 
Hassan	
Alfie	
Lola	

Alfie scored double the number of goals to Kira.

Lola scored 10 more goals than Alfie.

Hassan scored half as many goals as Lola.