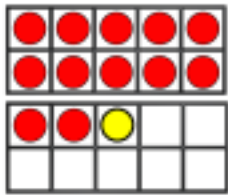


Choose a set of questions to answer using the addition and subtraction methods you learnt last week and this week.



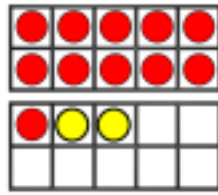
Complete the addition sentences.



$12 + 1 = 13$

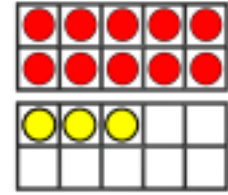
Can you write a subtraction sentence for each?

$13 - 1 = 12$



$11 + \_ = 13$

$13 - \_ = \_$

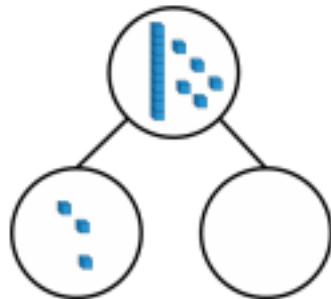


$\_ + \_ = \_$

$\_ - \_ = \_$



Complete:



$15 - \_ = 3$


$15 - 3 = \_$

$3 + \_ = 15$

$\_ + 3 = 15$



Complete and write addition and subtraction sentences for each bar model.



Can you use the numbers 8, 7 and 15 to make a bar model?

Can you write addition and subtraction sentences for this bar model?