

Name _____

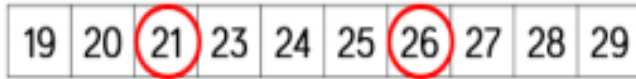
Compare numbers 10.2.21

[Watch along with Mrs Davies!](#)

Count the jumps on the number line to work out the difference between the two numbers.

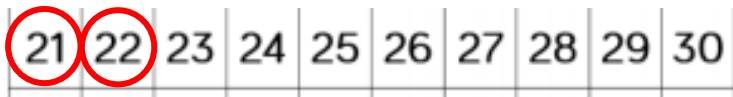
Mild 

Can you use the greater than $>$ and less than $<$ symbols to compare these numbers?



21 is _____ than 26

26 is _____ than 21



22 is _____ than 21

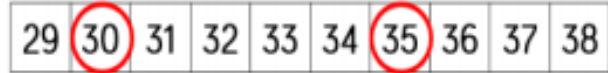
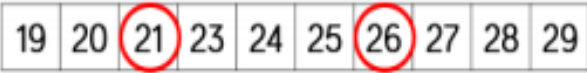
21 is _____ than 22

Name _____

Spicy



Use the number tracks to help you work out the difference between these numbers. Then use the greater than > and less than < symbols to compare them.



21 is _____ than 26

26 is _____ than 21

21 ○ 26 26 ○ 21

is more than

is less than

> <

Name _____

Hot



Use the 1-50 grid to compare the numbers.

12 ○ 21

38 ○ nineteen

40 ○ $39 + 1$

1	2	3	4	5	6	7	8	9	10
11	12	13	14	15	16	17	18	19	20
21	22	23	24	25	26	27	28	29	30
31	32	33	34	35	36	37	38	39	40
41	42	43	44	45	46	47	48	49	50



Use a number line or 1-50 grid to compare:

fifteen ○ 50

48 ○ 39

28 ○ 29

2 tens <