

In the video you will be asked to answer questions as you go along. You can do them all afterwards if you want to. Write the answers in your book or on this sheet. Whichever works best for you. <https://youtu.be/P7w7CDVjzfc>

1 Match the shape to its name.



circle



hexagon



pentagon



square



triangle



rectangle

2 Match the shape to its name.



cuboid



triangular prism



cube



pyramid

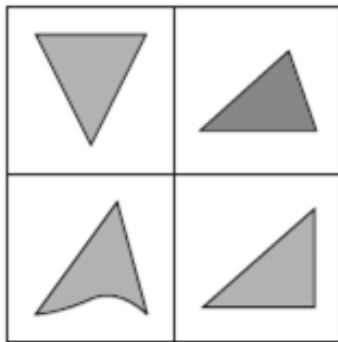


sphere



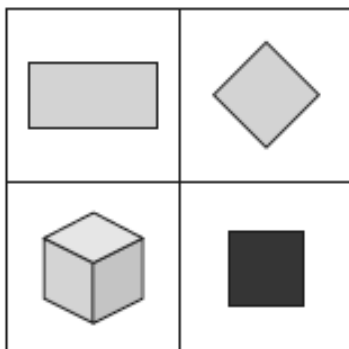
cylinder

3 Which shape is the odd one out?
Tick your answer.




Why did you choose this shape?

4 Which shape is the odd one out?
Tick your answer.



Why did you choose this shape?

5 Here are some shapes.



Complete the tally chart to show the number of each shape.

Shape	Tally	Total
triangle		
circle		
square		
rectangle		

Now go on a shape hunt walk.

You could also hunt around your house or school.

Create a tally of the shapes you see.

Can you see any Pentagons?

Can you see any octagons?

Can you see any hexagons?

What is the most common shape?