

Name _____


Year 1 - Counting in 2s 5s and 10s

11.2.21

Today we are practising different ways of counting. We are going to practise counting in groups of 2, 5 and 10. Watch this video first to help you. https://teachers.thenational.academy/lessons/counting-in-twos-fives-and-tens-65k34d?from_query=counting+in+twos There is also a quiz under the video to practise your skills ☺

Now try and use the skills you have learnt to answer these questions.

Mild 

 How many socks are there?




There are ___ socks in total.

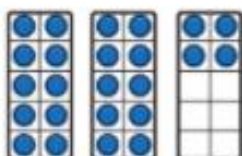


 a) There are 5 bikes.

How many  are there?

 There are 12 pairs of shoes.

How many shoes are there in total?



Use the tens frames
to help you ☺

Name _____

Spicy



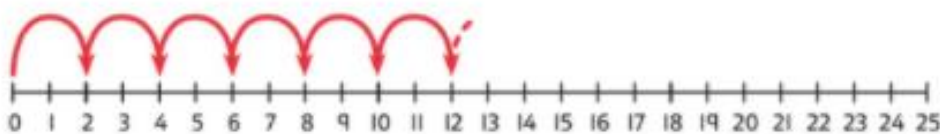
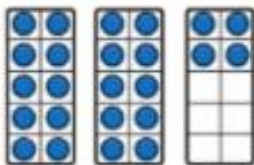

Continue colouring in 2s on the grid. What do you notice?

1	2	3	4	5	6	7	8	9	10
11	12	13	14	15	16	17	18	19	20
21	22	23	24	25	26	27	28	29	30
31	32	33	34	35	36	37	38	39	40
41	42	43	44	45	46	47	48	49	50



There are 12 pairs of shoes.

How many shoes are there in total?



There are shoes in total.



Complete each number track.

a)

16	18		22		26	28		32
0	10	20		40				
	10							50

Make sure you check if you need to count in 2, 5 or 10 😊


Name _____

Hot

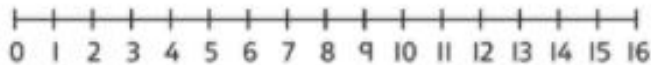
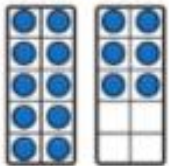


There are 12 pairs of shoes.

How many shoes are there in total?



There are 16 shoes. How many pairs are there?



There are pairs of shoes.




Complete each number track.

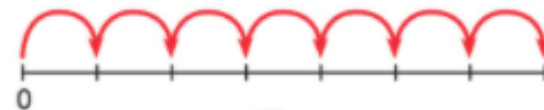


a) How many  are there in 5 tubes?

b) How many  are there in 6 tubes?



How many  are there in 7 tubes?



There are  in 7 tubes.