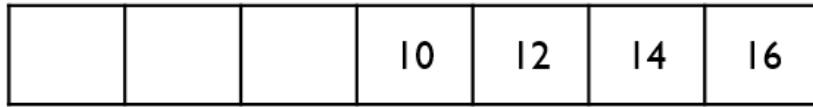


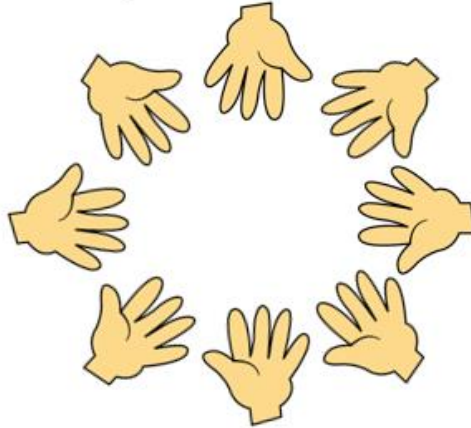
Year 1 Counting in 2's 5's and 10's word problems [Watch with Mrs Davies](#)

Mild 🍏

Count in 2s backwards to complete the number track.



2 less 2 less 2 less 2 less 2 less 2 less



Count how many fingers and thumbs you can see altogether.

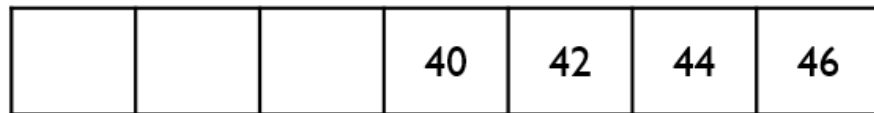
Now try counting the fingers and thumbs in your house. Remember you will need to count in 5's. Do you have more or less?

Name _____

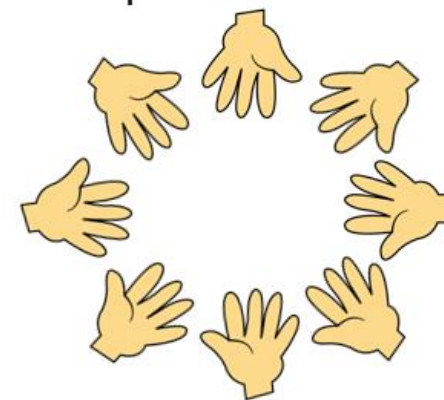
26.2.21

Spicy 

Count in 2s backwards to complete the number track.



2 less 2 less 2 less 2 less 2 less 2 less



Count how many fingers and thumbs you can see altogether.

Can you predict how many? Count to check.

Always, sometimes, never...



When you count in twos, your digits will be 0, 2, 4, 6, 8

Prove it!

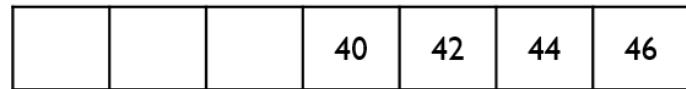
Now try counting the fingers and thumbs in your house. Remember you will need to count in 5's. Do you have more or less?

<input type="text"/>	<	<input type="text"/>
----------------------	---	----------------------

Name _____

Hot 

Count in 2s backwards to complete the number track.



2 less 2 less 2 less 2 less 2 less 2 less

If you continue counting, will you say the number 25?

Rosie counts back from 50 in 2s.

Amir counts up from 12 in 2s.



50, 48, 46, 44...



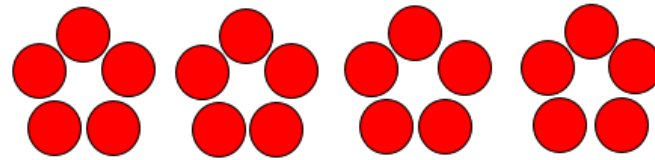
12, 14, 16...

They say their numbers together.

Who will say 30 first.

26.2.21

Annie is making this flower pattern with counters.



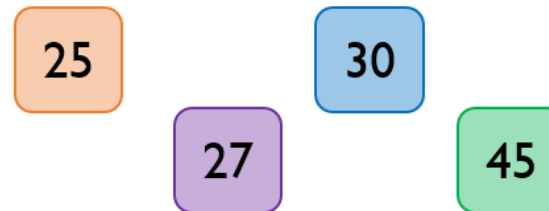
Annie says,



If you make 9 flowers, you will use 43 counters.

Do you agree with Annie?

Explain your answer.



Which is the odd one out? Explain your answer.