

Name _____

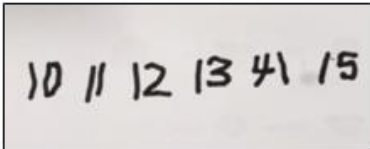

Year 1 Tuesday 23.2.21

Today we are looking at number word problems choose a chilly challenge to complete.

[Watch along with Ms Higgins!](#)

Mild

Whit writes:



10 11 12 13 41 15




Annie counts how many muffins she has.

Can you spot their mistakes?



I have 35 muffins.



30	31	32	33	34	35	36	37	38	39	40
----	----	----	----	----	----	----	----	----	----	----

Do you agree with Annie?

Explain your answer.

Name _____



Ron and Whitney are counting.

Ron says:



43, 42, 41, 40, 41, 42

Whitney writes:

10 11 12 13 41 15

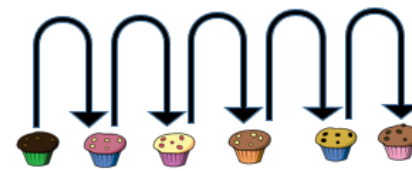


Can you spot their mistakes?

Annie counts how many muffins she has.



I have 35 muffins.



30	31	32	33	34	35	36	37	38	39	40
----	----	----	----	----	----	----	----	----	----	----



Do you agree with Annie?
Explain your answer.

Jack and Eva are playing a game.
They each collect a handful of cubes.
They arrange their cubes to see who has more.



I have more.

Jack



I have more.

Eva



Who is right?
Practise comparing objects with your friend.

Name _____

Hot 

 Eva is counting from 38 to 24

Will she say the number 39?

Will she say the number 29?

Will she say the number 19?

Explain how you know.



 Teddy is comparing two numbers.




My number is larger than 19
but not one more than 19

23

>

What could Teddy's number be?

What can't it be?



a) Count the bricks needed for the cat's body.
How did you count them?

b) Count all the bricks needed to make the cat.