

Name \_\_\_\_\_

Year 1 Tens and Units word problems

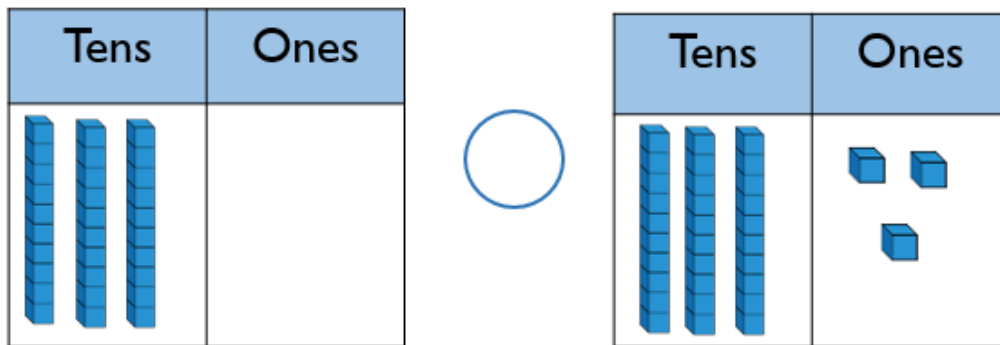
25.2.21

Use tens and units to help you answer these questions.

Mild 

 Dexter compares two numbers.

30 is less than 33



Do you agree with Dexter? Which symbol would you use?  $<$   $>$   $=$

Explain your answer.

 Use the clues to work out the number.

- I have a number with 2 tens.
- One less than my number makes the tens digit change.
- One more than my number has 1 one.

What is my number?

Can you make some clues to describe your secret number?

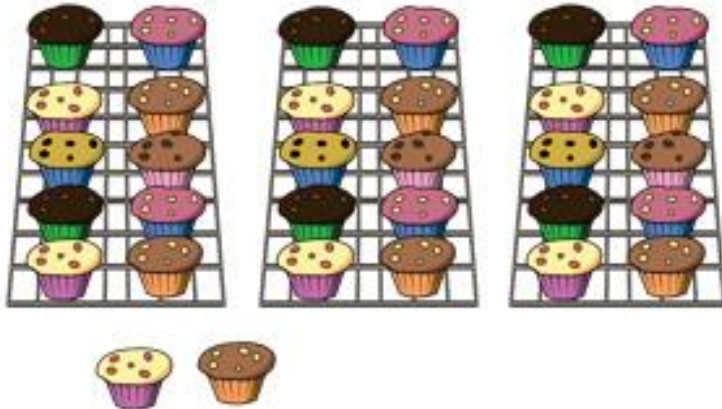
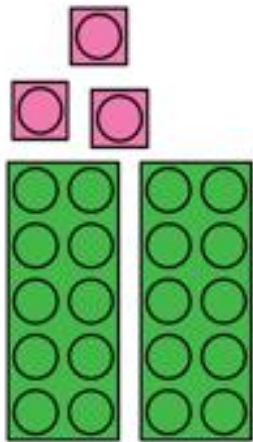
Name \_\_\_\_\_

Spicy 

Sort the representations in to two groups.

23

You could cut and stick these pictures to sort them 😊



Three tens and 2 ones

Twenty and three



Explain how you have sorted them.  
Can you add your own representations?

Name \_\_\_\_\_



## Always, Sometimes, Never...



When you find one more than a number, only the ones digit will change.

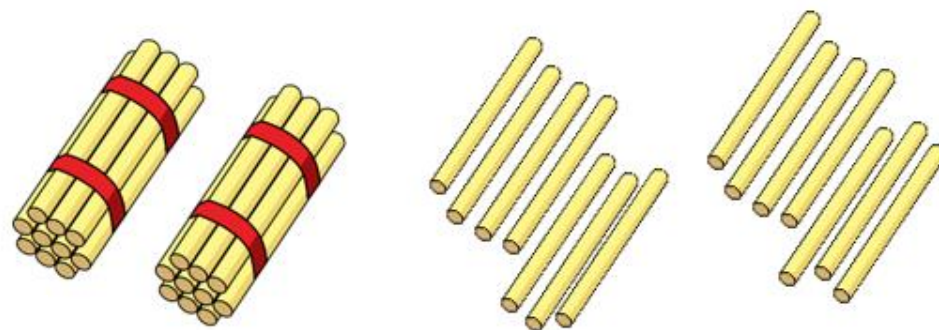
Convince me using some examples.

Whitney says,



I have 2 tens and 14 ones.

How many straws does Whitney have?



**I** a) How many different ways can you show 34?

Use the objects on the table.

b) Complete the sentences to show how 34 is made.

34 =  tens  ones

34 = 30 and