

Name: _____

Date: 4.3.21



Read these questions carefully and complete the problems – you will need some books nearby for the first part!

1. Then complete the table below, this first row has been done for you. Grab a book – it could be your reading book or one you have at home or in class (choose picture books then, if you feel ready, you could challenge yourself using a chapter book!)

Title of book	Count the number of pages in the book
The koala who could	Number = 16 10 more = 26 10 less = 6
	Number = 10 more = 10 less =
	Number = 10 more = 10 less =
	Number = 10 more = 10 less =
	Number = 10 more = 10 less =

2. Duncan wants to buy a box of crayons for his friend.
He has 35p in one hand and 27p in the other hand.



- How much money does Duncan have altogether?
- Duncan buys a box of crayons which costs 51p. How much money does he have left now?

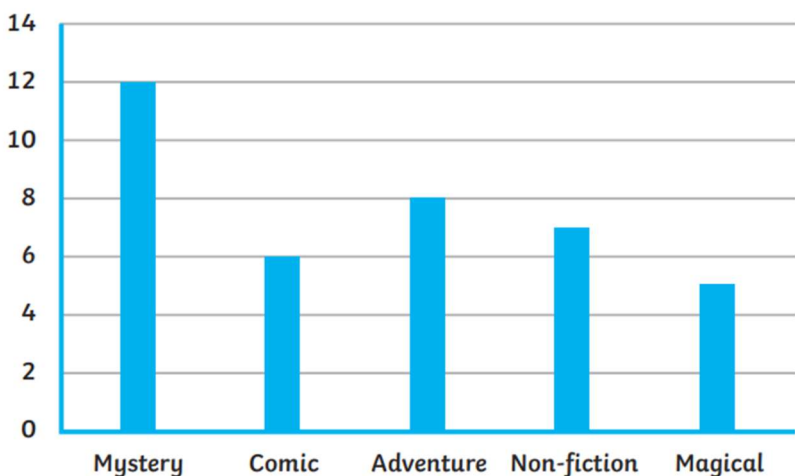
3. Matilda had 10 books to take back to the library.



She could only carry two a day.
How many days would it take to carry them all back?

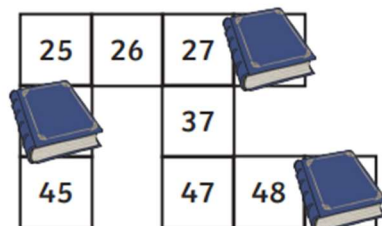
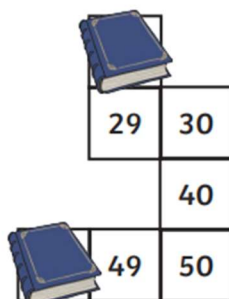
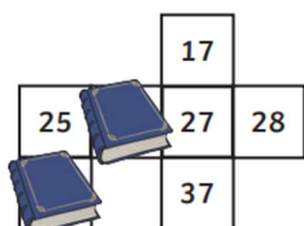
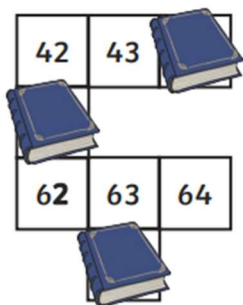
4. Here is a graph to show the types of books, or genres, that a Year 2 class enjoy.

Class 2's Favourite Genres



- How many children enjoy adventure books? _____
- How many more children chose mystery books than non-fiction books? _____
- What is the genre that fewest children chose? _____

5. Work out the numbers the books are covering on these hundred squares.
Write the numbers near the books.



Name: _____

Date: 1.3.2021



Challenge question

Use this code to solve the number sentences and work out the phrase below.

a	b	c	d	e	f	g	h	i	j
14	6	8	12	3	24	13	4	16	0
k	l	m	n	o	p	q	r	s	t
7	1	11	2	9	21	22	17	25	18
u	v	w	x	y	z	.	!	?	'
15	10	20	5	19	23	27	29	30	28

$10 + 10$ $3 + 1$ $8 + 6$ $9 + 9$ $14 + 2$ $23 + 2$

$7 + 12$ $5 + 4$ $9 + 6$ $8 + 9$

$20 + 4$ $11 + 3$ $6 + 4$ $3 + 6$ $11 + 4$ $15 + 2$ $6 + 10$ $2 + 16$ $0 + 3$

$1 + 5$ $6 + 3$ $7 + 2$ $2 + 5$?

