

4.3.21

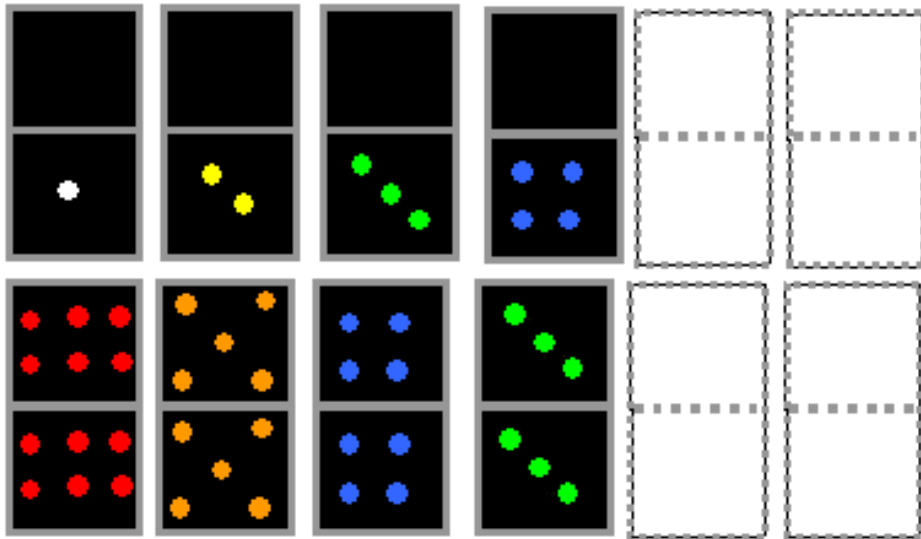
Name _____

Counting and Estimating use your counting and estimating skills to answer these questions. Remember an estimation is a sensible guess!

[Watch along with Miss Charlton!](#)



Which comes next in each pattern of dominoes?



Have a look at this photo of some peaches:



How many?
How did you count them?

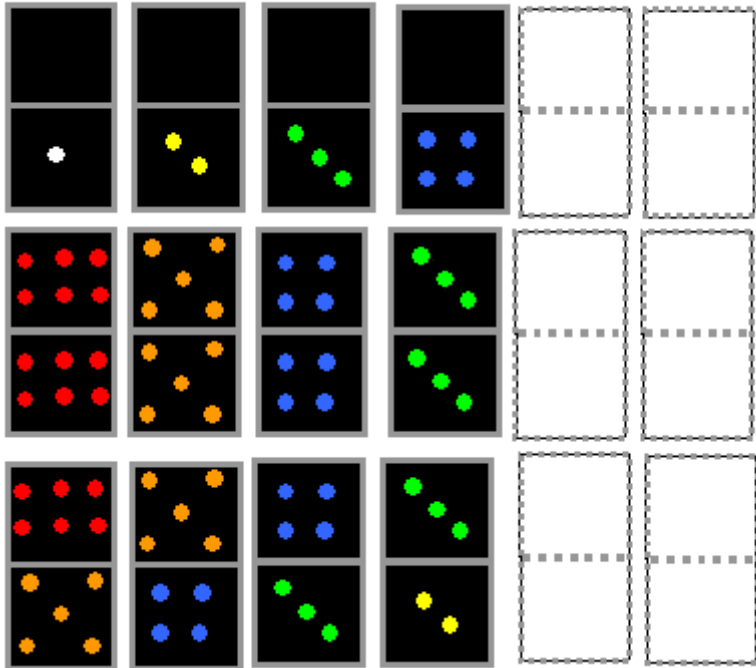
4.3.21

Name _____

Counting and Estimating use your counting and estimating skills to answer these questions. Remember an estimation is a sensible guess!



Which comes next in each pattern of dominoes?



Now take a look at this picture of oranges:



How many?
How did you count them?

4.3.21


Name _____

Counting and Estimating use your counting and estimating skills to answer these questions. Remember an estimation is a sensible guess!



Hot

How many dots?



How did you count them?

Take a look at these pictures:



Estimate how many pencils/pens you can see in each one.

What was your method?

How else could you do it?

Is there one way that is particularly useful? Why?