




## Maths – Counting in sets 27<sup>th</sup> April 2020

This week we are continuing with counting in sets, start by practicing counting in 10's, 5's and 2's. You could use a 100 square to help you. Here is a link to the Splat Square <https://www.primarygames.co.uk/pg2/splat/splatsq100.html> or there are 100 squares on Education City. Do you notice the pattern?

Collect an even number of objects you could use teddies, cars or lego (anything you have lots of), you could start with 10. Can you make a repeated addition number sentence for this group? How many different number sentences can you think of? Record these number sentences in your Maths book.


Here is an example



$$2 + 2 + 2 = 6$$



$$3 + 3 = 6$$



$$1 + 1 + 1 + 1 + 1 + 1 = 6$$