





Complete the table to work out how many cubes in each array. The first one has been done for you.

Array	Columns	Rows	Total
	<p>5 columns 2 cubes in each column</p>	<p>2 rows 5 cubes in each row</p>	<p><math>2 + 2 + 2 + 2 + 2 = 10</math> <math>5 + 5 = 10</math></p>
	<p>___ columns ___ cubes in each column</p>	<p>___ rows ___ cubes in each row</p>	
	<p>___ columns ___ cubes in each column</p>	<p>___ rows ___ cubes in each row</p>	
	<p>___ columns ___ cubes in each column</p>	<p>___ rows ___ cubes in each row</p>	