

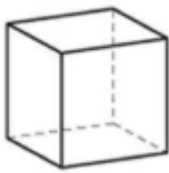


What shape am I?

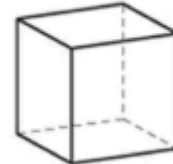
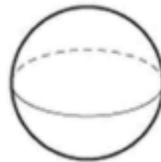
Work out the 3D shape from the description. You can use the 3D shape properties vocabulary mat to help.

Colour in or circle the shape you think matches.

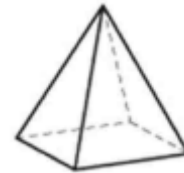
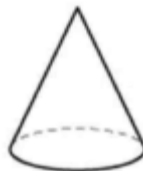
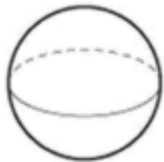
I have 2 flat faces that are circles and one curved face.



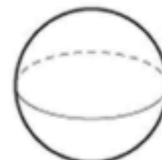
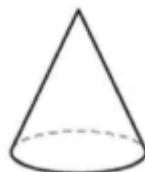
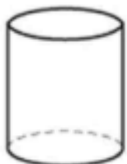
All of my faces are flat. They are all squares.



I have a point. I have 2 faces. One is flat and the other curved. My flat face is a circle.



I can roll. I only have one curved face.



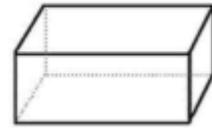
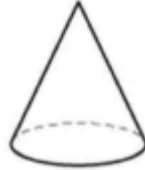
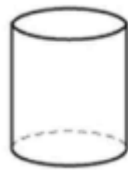
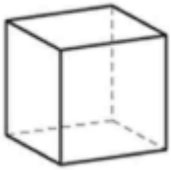


What shape am I?

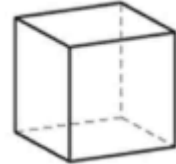
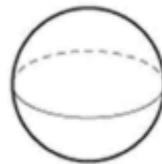
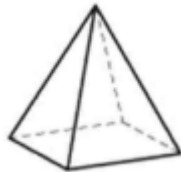
Work out the 3D shape from the description. You can use the 3D shape properties vocabulary mat to help.

Colour in or circle the shape you think matches.

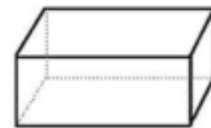
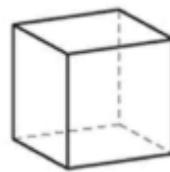
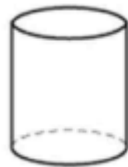
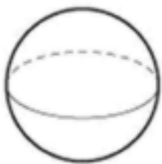
I have 6 rectangular faces. All of my edges are straight.



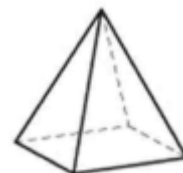
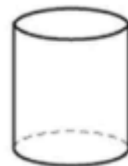
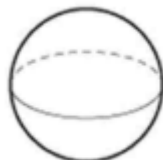
I have 5 flat faces and a point. One of my faces is a square.



I have 8 corners and 6 flat faces. All of my faces are squares.



I can roll. I have one curved edge and a point.



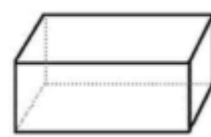
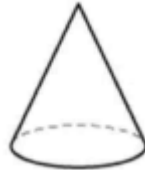
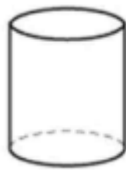
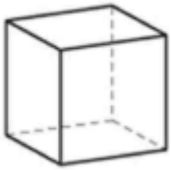


What shape am I?

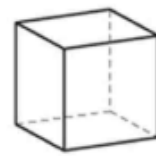
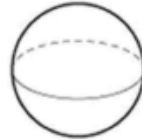
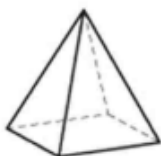
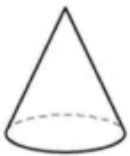
You will need to use the 3D shape vocabulary shape mat to help today.

1. Colour in or circle the shape you think matches the description.

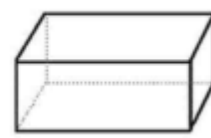
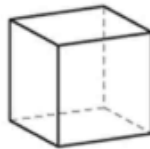
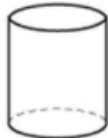
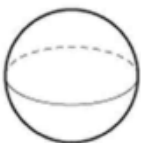
I have 6 rectangular faces. All of my edges are straight.



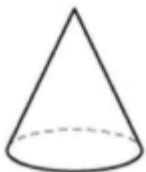
I have 5 flat faces and a point. All of my edges are straight. One of my faces is a square.



I have 2 curved edges. One of my faces is curved, the other 2 are flat.



2. Write your own description of the following shapes using the correct vocabulary.



(more on the next page)

