

Sharing Challenge!


19th May 2020

Try out some of these challenges to work out half. You could use real objects around your home. Start with the first question and work your way through, they get trickier as they go on! The first one has been done for you.




There are 6 beads.
Half of 6 is 3.

Mrs Gregory has asked her class to put half the balls in the hoop. How many will there be in the hoop?




There are _____ castles.
Half of _____ is _____.



There are _____ lego pieces.
Half of _____ is _____.

Making Pizzas!

Anna and Alex were making a pizza. They shared the toppings out equally. How many toppings did they get each?



Measuring Monkeys!

Megan has been measuring the monkeys in her book.

Lucas
6cm



Shan
8cm



Dara
4cm



Charlie is **12cm** tall.

Which monkey is $\frac{1}{2}$ the height of Charlie?

Explain your answer.