

Name \_\_\_\_\_



You can either print this page or draw and write them in your book

1. Draw a ring around the tens digit in these numbers

32

49

29

18

63

74

2. Sort the numbers into the squares

Odd

Even

14

23

31

72

56

10

8

5

9

3. Add these numbers

$12 + 24 = \underline{\quad}$

$36 + 11 = \underline{\quad}$

4. Subtract these numbers

$27 - 15 = \underline{\quad}$

$32 - 20 = \underline{\quad}$

5. Mrs Theobald has 46 grapes. She gives 24 to Mrs Ball.

How many grapes does Mrs Theobald have left?


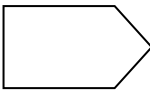
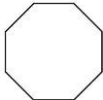
6. Write the 2 multiplications for this array.



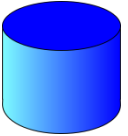


7. How many legs do 6 cats have?

Write the multiplication and find the answer.

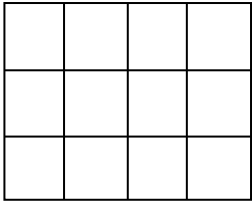
8. Count the properties of these 2D shapes and write the numbers in the correct box

	Shape name	Corners	Sides
			
			
			

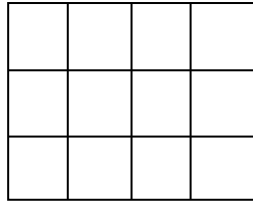
9. Now try these 3D shapes

	Shape name	Vertices	Edges
			
			
			

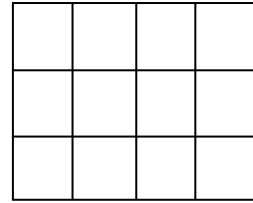
10. Shade the correct amount of the shape.



$\frac{1}{2}$



$\frac{1}{4}$



$\frac{1}{3}$

11. Write another fraction that is equal to this one?

$$\frac{2}{4} =$$