

Let's take a look at five minute intervals.

Read this carefully and answer the questions.

Then try some of the activities on Education City. There is a set of activities set on the homework page when you have logged in.

## Telling time to 5 minutes

### Discover



- 1 a) The bus is due to arrive in 5 minutes.  
What time will the bus arrive?
- b) What time will the bus arrive if it is 15 minutes late?

### Share

a)

Each number on the clock represents another 5 minutes.

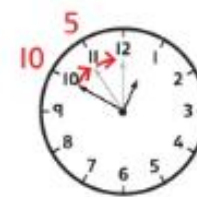


Before a half-past time, we can count in 5s to see how many minutes have gone past the o'clock time.

After a half-past time, we can count in 5s to see how many minutes there are to the next o'clock time.



It is ten past 3.



It is ten to 2.



Count in 5s to find the answer.

The time now is twenty minutes past 1.

In another 5 minutes the time will be:

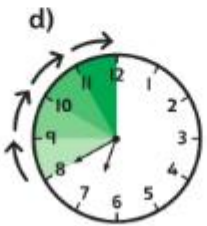
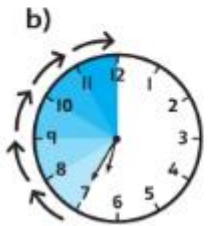


The bus will arrive at twenty-five minutes past 1.



## Think together

1 What time is it?



These times are something "past 6".



These times are something "to 7".

2 What time is it?

