

Maths

Teen numbers




If you are continuing with learning from home please complete this activity

We will be doing this in school this week, so no need to complete before your sessions at school

We are going to explore different ways of representing teen numbers.

Watch the video below to find out how to complete the activity. You will need to make a 2 tens frames and have 20 small objects so you can join in with the instructions on the video. The teen number sheets you will need are on the following pages

<https://www.youtube.com/watch?v=MCYZfAGsecM>

 Mild	Complete numbers 11-15
 Spicy	Complete 5 teen numbers of your choice
 Hot	Complete numbers 15 -20. You can do them all if you like over a period of time.

Write it

eleven

As a picture

11

Tens frames

Circle it

13 15 11 14 13 11
14 11 16 15 13
13 11 15 11 14 12
14 12 11 14 15
11 16 13 15 12 11

Write it

twelve

As a picture

12

Tens frames

Circle it

12 15 11 12 13 11
14 13 16 12 13
13 11 15 12 14 12
14 12 11 14 15
12 16 13 15 12 11

Write it

thirteen

As a picture

13

Tens frames

Circle it

12 15 11 12 13 11
14 13 16 12 13
13 11 13 12 14 12
14 12 13 14 15
12 16 13 15 12 11

Write it

fourteen

As a picture

14

Tens frames

Circle it

12 15 11 12 13 14
14 15 16 12 13
13 11 14 12 14 12
14 12 11 14 15
12 14 13 15 14 11

Write it

fifteen

As a picture

15

Tens frames

Circle it

12 15 11 15 13 11
14 12 16 12 13
13 11 15 12 15 12
14 12 11 14 15
15 16 13 15 12 11

Write it

sixteen

As a picture

16

Tens frames

Circle it

16 15 11 12 13 16
14 13 16 12 13
13 16 15 12 14 12
14 12 11 16 15
12 16 13 15 16 11

Write it

seventeen

As a picture

17

Tens frames

Circle it

15 13 11 12 17 11
14 15 16 12 13
13 17 15 12 17 12
14 12 17 14 15
17 16 13 17 12 11

Write it

eighteen

As a picture

18

Tens frames

Circle it

12 15 17 16 13 18
14 13 16 18 13
13 18 15 12 14 18
14 18 17 14 15
124 16 13 15 18

Write it

nineteen

As a picture

19

Tens frames

Circle it

17 15 18 12 19 11
19 13 16 19 13
13 19 15 12 14 12
14 19 18 14 15
12 19 13 15 16 11

Write it

twenty

As a picture

20

Tens frames

Circle it

19	15	20	12	15	17
20	13	16	20	13	
13	11	15	20	14	12
20	12	11	14	15	
20	16	13	20	12	20