




Name: _____ Date: _____

Find Half of a quantity

 Find half of each amount.



 Find half of the amounts and complete the stem sentences.




There are ____ beads.

Half of ____ is ____



There are ____ marbles.

Half of ____ is ____

 Find half of the sheep.



There are ____ sheep.

Half of ____ is ____

How many different ways can you shade one half of the shapes?

