




Space Maths!

Addition Problem Solving


If you are continuing with learning from home please complete this activity.

We will be doing this activity in school this week, so no need to complete before your sessions at school.

To help solve these problems you will need to collect some small objects from around the house or raisins are quite good as you can reward your hard work afterwards with a healthy snack. 😊

 Mild	Space I spy and add to 10
 Spicy	Space I spy and add to 20
 Hot	Space I spy and add to 20 AND find the missing numbers using small objects to complete the 'Rocket Maths' sheet. Choose a number up to 20 for the last rocket and find 2 numbers to add together to make that number.

Space I Spy and Add to 10





Space I Spy and Add to 10

Count the number of each type of space picture needed in the addition number sentence. Write the numbers in the boxes to create and solve an addition number sentence.

 $\square +$  $\square = \square$


 $\square +$  $\square = \square$

 $\square +$  $\square = \square$

 $\square +$  $\square = \square$

 $\square +$  $\square = \square$

Space I Spy and Add to 20



Space I Spy and Add to 20

Count the number of each type of space picture needed in the addition number sentence. Write the numbers in the boxes to create and solve an addition number sentence.

 +  =

 +  =

 +  =

 +  =

 +  =

Name: _____

w/b 22nd June 2020

Use your cubes or objects to find the missing numbers.

