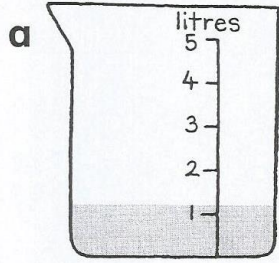

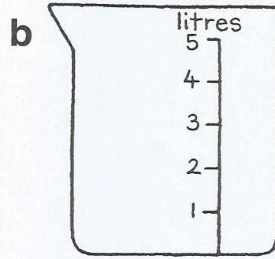


Today you will be estimating on a scale the amount of water and then ordering the amounts.

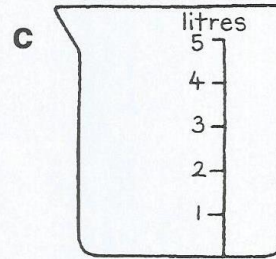
• Colour the jugs to show the correct amount of water.



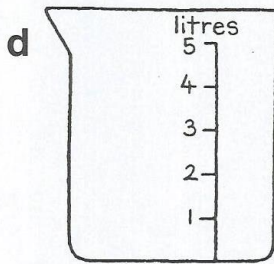
just over 1 litre



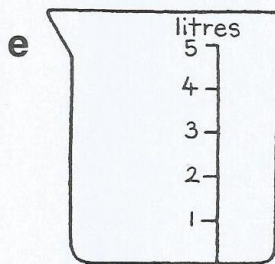
about half a litre



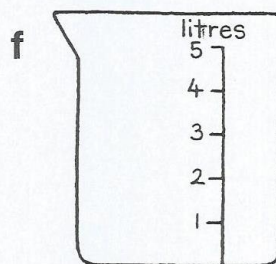
nearly 4 litres



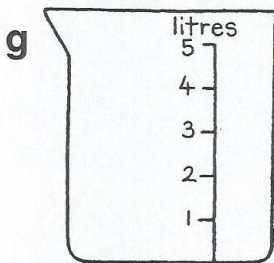
just under 2 litres



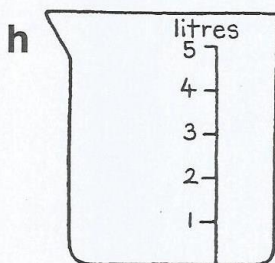
about 5 litres



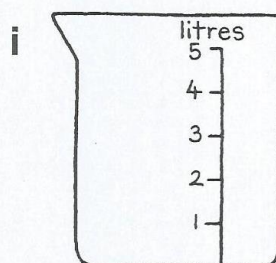
just less than 3 litres



about 2 litres



3 and a bit litres



about a litre

Now write the order of the jugs starting with the least amount

--	--	--	--	--	--	--	--	--