


## Maths task 2 – o'clock and half past

Cut and stick these clocks and times into your maths book, do as many as you can. Use this link to help remind you about telling the time

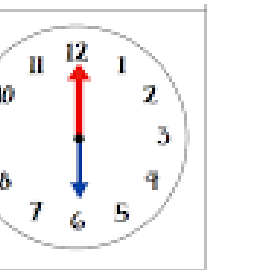
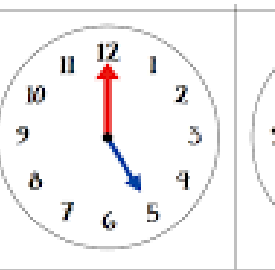
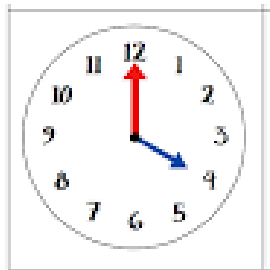
<https://www.bbc.co.uk/bitesize/topics/zhk82hv/articles/zcmdwxs>



One o'clock

Three o'clock

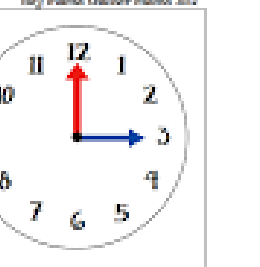
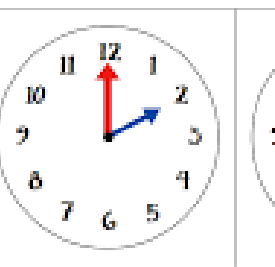
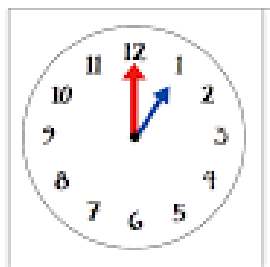
Twelve o'clock



Five o'clock

Six o'clock

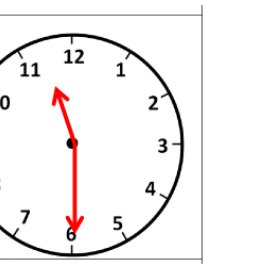
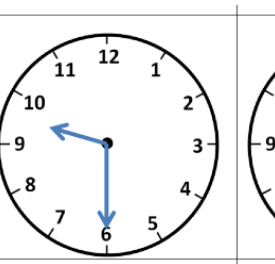
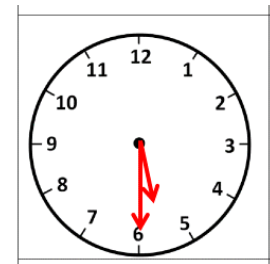
Four o'clock



Two o'clock

Three o'clock

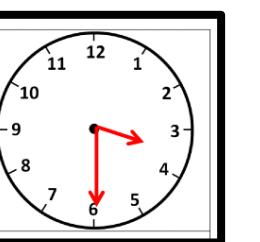
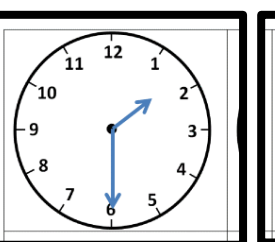

One o'clock



Half past nine

Half past eleven

Half past five



Half past one

Five o'clock

Half past three