






# Maths Task 2




WB 29/06/20



Use the aliens to solve the subtraction number sentences below. Cut out aliens and put the correct number on the spaceship. Take away the correct number and write how many you have left.




 Mild	Complete the first 6 number sentences using your aliens to help
 Spicy	Complete the first 6 number sentences and the following 6 using your aliens to help
 Hot	Complete all the number sentences using your aliens to help.



 Mild	 Spicy	 Hot
$10 - 5 =$		
$8 - 3 =$		
$6 - 1 =$		
$9 - 4 =$		
$10 - 2 =$		
$7 - 4 =$		

 Spicy	 Hot
$10 - 6 =$	
$11 - 3 =$	
$13 - 1 =$	
$14 - 8 =$	
$12 - 2 =$	
$15 - 3 =$	

 Hot
$10 - 5 =$
$17 - 3 =$
$16 - 7 =$
$18 - 4 =$
$20 - 2 =$
$20 - 19 =$



