

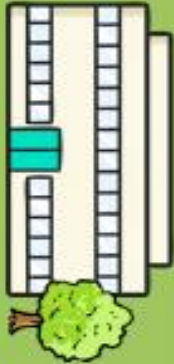























Maths Task 1 - Number bonds 10/20

Cut and stick the pictures to find the two numbers that make 10, the rainbow needs to have a pot of gold at the end. The first one has been done for you.

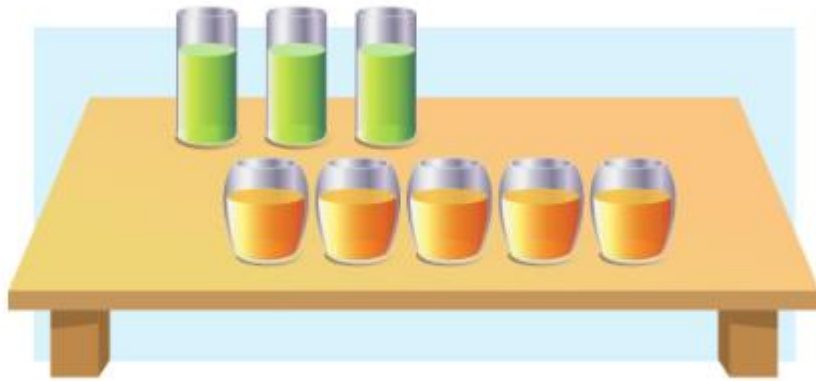
The image contains 15 cards for a number bond activity. Each card features a rainbow and either a cloud with a number or a pot of gold with a number. The cards are arranged in five columns. The first column has three cards with clouds containing the numbers 5, 3, and 10. The second column has three cards with clouds containing the numbers 6, 7, and 7. The third column has three cards with clouds containing the numbers 4, 9, and 8. The fourth column has three cards with pots of gold containing the numbers 6, 1, and 0. The fifth column has three cards with pots of gold containing the numbers 7, 5, and 2. A dashed vertical line on the left of each card indicates where to cut. The first card in the first column is already cut, with the cloud and pot of gold separated from the rainbow.


Listen to the song to help you remember your number bonds to 20 <https://www.youtube.com/watch?v=h6udqW6VhWg>

Move round the board by rolling a dice and say the number that adds to the number you've landed on to make 20. Good luck!

Start		3	10	Go back one space.		15	0	4
18		16		14		20		Go back one space.
3		0		7		6		12
15		19		12		13		10
6		Go back one space.		1		Go back one space.		11
17		4		19		7		9
2	Go back one space.	11		Go back one space.	8	5		Finish

Use your number facts to work out the answers to these questions



- 1 a) Put the 8 glasses into 2 groups.
Fill in the .
Write a number sentence.



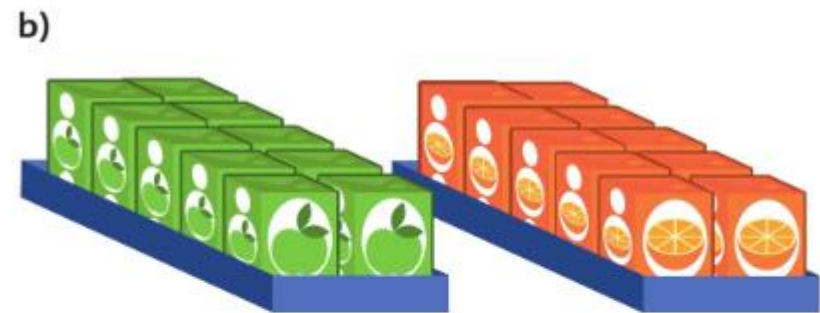
- b) Look at these number sentences.
What is the same? What is different?


$8 = 5 + 3$ $8 = 3 + 5$

$3 + 5 = 8$ $5 + 3 = 8$



- 1 a) 3  are apple juice.
How many  are orange juice?



- 10  are apple juice.
How many  are orange juice?