



More learning about thirds today. Three activities to try.

Circle $\frac{1}{3}$ of each group of items.

Complete the number sentences.

a)  $\frac{1}{3}$ of 15 =

b)  of =

c)  of =



Teddy

I have $\frac{1}{3}$ of £9



Mo

I have $\frac{1}{2}$ of £8

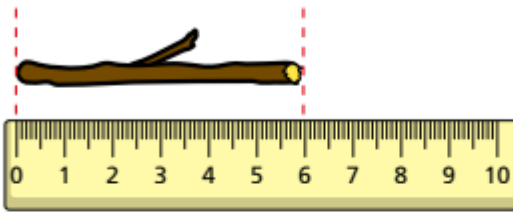
Who has more money? _____

How do you know?

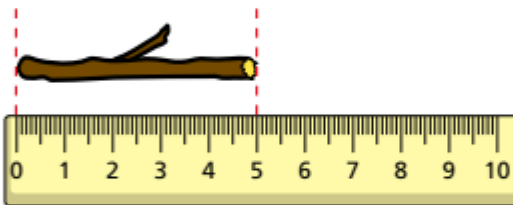
Whitney snaps two sticks into thirds.

Here is $\frac{1}{3}$ of each stick.

Stick A



Stick B



a) How long was stick A before Whitney snapped it?

 cm

b) How long was stick B before Whitney snapped it?

 cm