


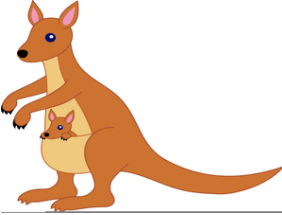




### Ordinal Numbers

Cut out the ordinal number below and stick it next to the correct Australian picture. Look at the line of Australian themed pictures to help work out their position e.g. the kangaroo would be 1<sup>st</sup>.




	
	
	
	
	











1 <sup>st</sup>	2 <sup>nd</sup>	3 <sup>rd</sup>	4 <sup>th</sup>	5 <sup>th</sup>
-----------------	-----------------	-----------------	-----------------	-----------------



### Ordinal Numbers

Cut out the ordinal number below and stick it next to the correct minibeast. Look at the line of Australian and French pictures to help work out their position e.g. the kangaroo would be 1<sup>st</sup>.




			
			
			
			
			

1 <sup>st</sup>	2 <sup>nd</sup>	3 <sup>rd</sup>	4 <sup>th</sup>	5 <sup>th</sup>
6 <sup>th</sup>	7 <sup>th</sup>	8 <sup>th</sup>	9 <sup>th</sup>	10 <sup>th</sup>



### Ordinal Numbers

Look at the line of minibeasts to help work out their position. Using the number bank at the bottom, **write** the position of the French and Australian pictures in the line e.g. the kangaroo is 2<sup>nd</sup>.




1st	2nd	3rd	4th	5th	6th	7th
8th	9th	10th	11th	12th	13th	14th