

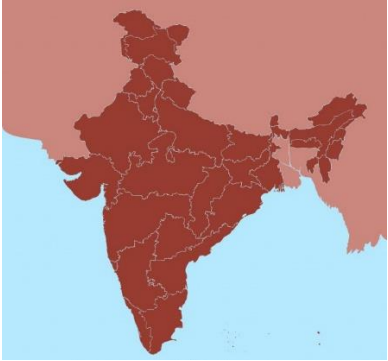












Maths Task 1 - Weather chart



W.B. 13.07.20

We have been learning about India, here is a weather chart to show the weather in England and India. Compare the temperatures to find out which country is hotter. What is the difference between the weather in Chembakolli and Ashtead? Please send in this piece of work to your teacher using the class email blue@barnett-wood.surrey.sch.uk or orange@barnett-wood.surrey.sch.uk

	<u>Monday</u>	<u>Tuesday</u>	<u>Wednesday</u>	<u>Thursday</u>	<u>Friday</u>
<u>Chembakolli</u> 	29°  $29 - 23 =$	24°  $24 - 22 =$	27°  $27 - 20 =$	29°  $29 - 21 =$	29°  $29 - 22 =$
<u>Ashtead</u> 	23° 	22° 	20° 	21° 	22° 