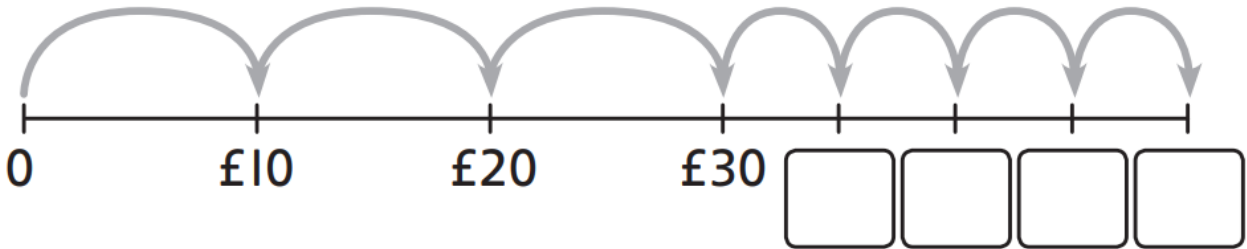


Name

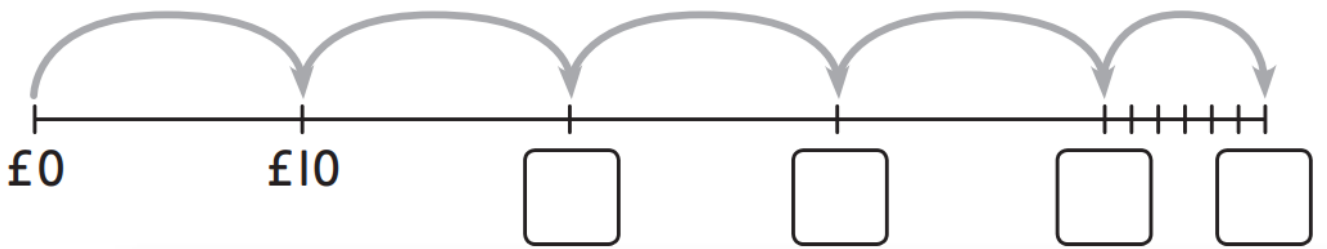
Date

How much money is there?



There is £ .

How much money can you see?



There is £ .

Circle the money that totals £43



Count the money



3 Match the money to the correct total.


CHALLENGE



£42



£60



£52

I don't know how to count in 20s!  
How can I begin?



## Reflect

Rosie says,



I have 43 p in silver coins.

Do you agree?

Explain why.

---

---

---