





Match the shape to its name.



cube

cylinder

cuboid

pyramid

cone

sphere

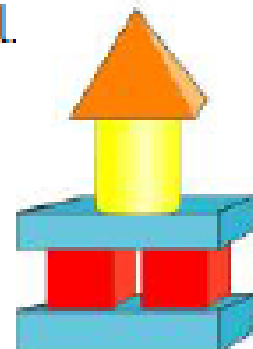
Complete the sentences to describe the model.

There are _____ cuboids.

There are _____ cylinders.

There are _____ pyramids.

There are _____ cubes.



Build your own model using 3-D shapes and ask a partner to describe it.

Circle the cubes. Tick the pyramids.

