

Name: _____

19.11.2020

Comparing amounts of money

1.

a) Who has the most money?

Jerry has



Roxy has



_____ has the most money.

b) Who has the least money?

Callie has




Sandeep has




_____ has the least money.

c) Circle the wallet that has the least amount of money.



d) Use $<$, $>$ or $=$ to compare the money



2. Use $<$, $>$ or $=$ to compare these amounts.



d) $£20 + £5$ $£20 + £10$

e) $£50 + £10$ $£50 + £5 + £5$

3. Are these statements true or false? Tick the boxes.

	True	False
£20, £5, 50p, 10p is greater than £50	<input type="checkbox"/>	<input type="checkbox"/>
£10, £10, £5, £5 is equal to £20	<input type="checkbox"/>	<input type="checkbox"/>
£5, £2 is less than £2, £2, £2, £1	<input type="checkbox"/>	<input type="checkbox"/>

4. Fill in the missing boxes to make the statement true.

Is there more than one answer?

$$£20 - \boxed{} = £5 + \boxed{}$$

Name: _____

19.11.2020





Hassan has £26. Paige has £50.

Mai has more money than Hassan but less than Paige.

How much could Mai have?

Draw notes and coins to make this amount.



Draw notes and coins like this.  

Reflect

Bag 1 has more money in it than Bag 2.

Explain how you know this.

Try to use words like *total*, *greater*, *less* and *equal*.



Bag 1



Bag 2

- _____
- _____
- _____
- _____

Four 5 pence coins are worth more than two 10 pence coins.



Do you agree? Explain why.

Annie has three coins in her hand.

Jack says,



I have more than you because I have a 50 pence coin.

Is he correct?

Explain why.