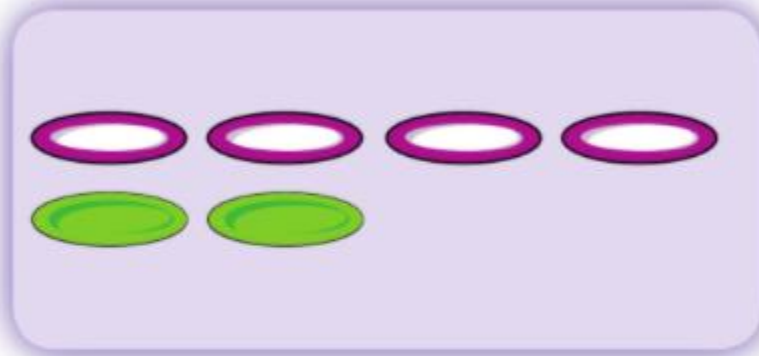


# Maths- Wednesday 25<sup>th</sup> November

## Think together



1 Are there more  or more  ?



I will use .

How can you compare the purple plates and the green plates?

Which group has more?

How can you check?

Children need to understand 'fewer' before moving onto question 2.

# Maths- Wednesday 25<sup>th</sup> November

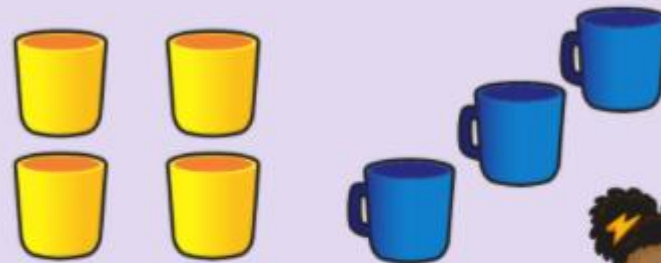
What does fewer mean?

Can you see which group has fewer without counting?

How can you check?

Children need to understand 'fewer' before moving onto question 2.

2 Are there fewer  or fewer .




I can see without counting.

Do you remember what 'fewer' means?



# Maths- Wednesday 25<sup>th</sup> November

Draw lines to match the sets together to find out which there are more of.



Use your subitising skills to work out the answer

