

Maths- Tuesday 24th November

Discover



Are there more  or more ?

How many oranges are there?

How many apples are there?

Can you say what 'more' means?

How could you work out which fruit there are more of?


Look for other groups of non-identical objects in the picture e.g. plates and cups. Compare the sets using similar questions to those above.

Maths- Tuesday 24th November


Share

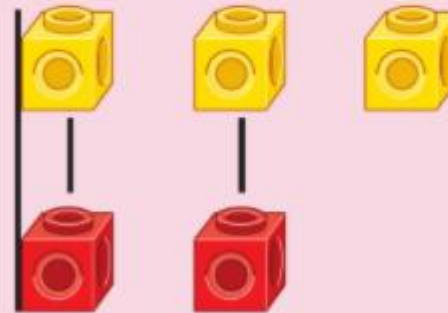
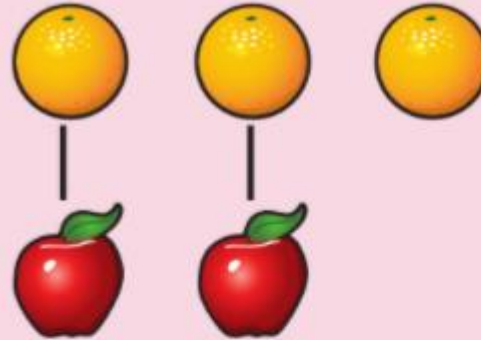
Are there more  or more ? 



I don't have any .
Can I still do this?



I lined up .



There are more  than .

What can you use to represent the oranges?

How can you line them up or match them up to help you compare?

Can you see which fruit there are more of? How do you know?

Use five frames and cubes to represent fruits in picture. Alternatively use objects from around the house to compare. These need to be the same thing for each set to help compare.