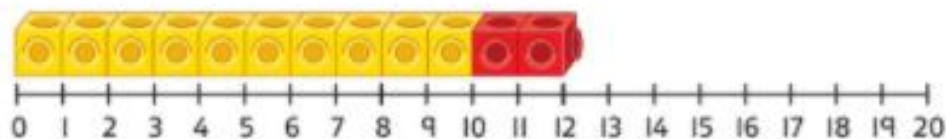
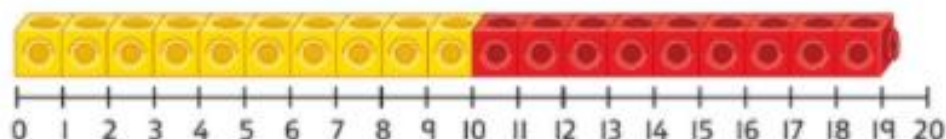
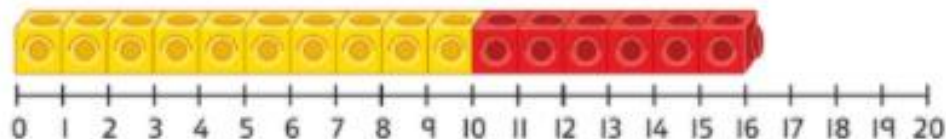


Think together



1 Put the numbers 16, 19 and 12 in order.



is less than

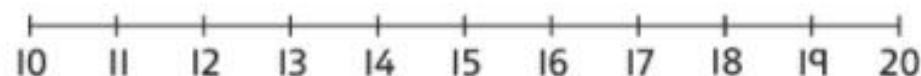
is less than

< <

2 Order the numbers, starting with the **smallest**.

14 16 13

< <

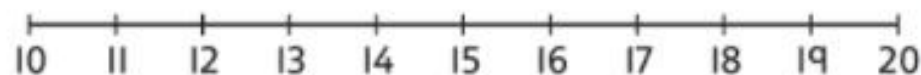


3 Which numbers could go in the boxes?

$13 < \square < 17$

$17 > \square > 13$

$13 < 17 < \square$



Is there more than one answer?

