

We are learning the 2 times table

1. Write a fact from the 2 times-table to match the picture.







2. Match the multiplication to the correct circle.

3×2

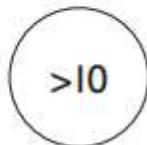
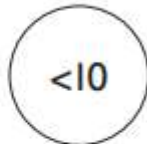
7×2

10×2

9×2

0×2

5×2



I think one of them can't match. I wonder why.



Use these words to help you say why.

greater

less

3. a) Complete the number line.



b) Which times-table does the number line show?


1 times-table

2 times-table

3 times-table


4. Complete the array and times-table fact so that they match.

a)




$$2 \times 2 = \square$$

b)




$$2 \times 5 = \square$$

c)



$$2 \times \square = 8$$

5.



$$4 \times 4 = \square \times 2$$



Complete the number sentences.

a) $3 \times 2 = \square$

f) $\square = 12 \times 2$

b) $\square = 9 \times 2$

g) $2 \times \square = 2$

c) $2 \times 5 = \square$

h) $2 \times 0 = \square$

d) $2 \times \square = 4$

i) $14 = 2 \times \square$

e) $12 = \square \times 2$

j) $\square \times 2 = 22$

Reflect

Show that 6×2 is 12 in more than two ways.

