


The house is 6  high.

The tower is twice as high.

How many  high is the tower?


$2 \times 6 = \square$

The tower is  $\square$   high.

Arun has 4 .

Jess has 5 times as many.

How many  does Jess have?



$\square \times \square = \square$

Jess has  $\square$  .

Paul has 6 pages of 10 stickers.

How many stickers does Paul have?

$$\square \times \square = \square$$

Mary has 5 pages of 4 stickers.

How many stickers does Mary have?

$$\square \times \square = \square$$

There are four baskets.

There are three dolls in each basket.

How many dolls are there altogether?


With 12 cubes, how many different arrays can you create?

Once you have created your array complete:

$$\underline{\quad} \times \underline{\quad} = \underline{\quad} \times \underline{\quad}$$

There are 35 fingers.  
How many hands?

$$\underline{\quad} \times 5 = 35$$



Tennis balls come in packs of 2 and 5

Whitney has 22 tubes of balls.

How many of each pack could she have?