

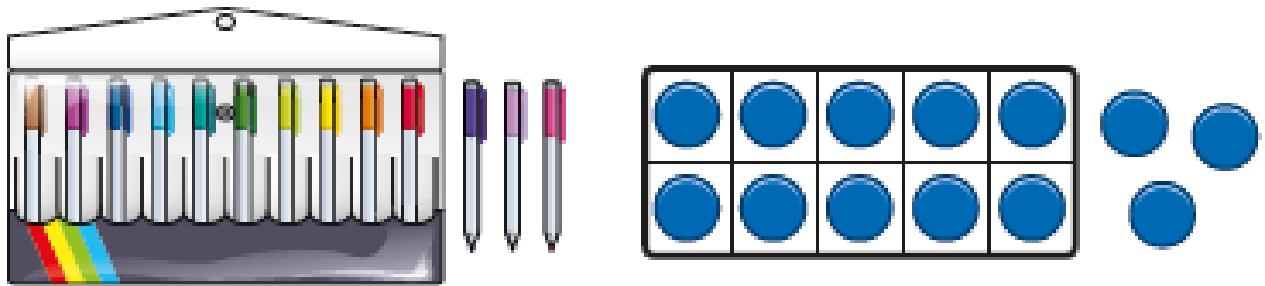


- 1 There is 1 pack of ten  and 3 more.
How many  are there?




There are .

- 2 How many  are there in 2 packs?



There are  in 2 packs.

3 How many  are there?


How many tens are there?

How many ones are there?



There are  .

There is ten and ones.

There is one pack
and 8 more.
I think there are 18  .
Am I right?

Is the
pack full?

