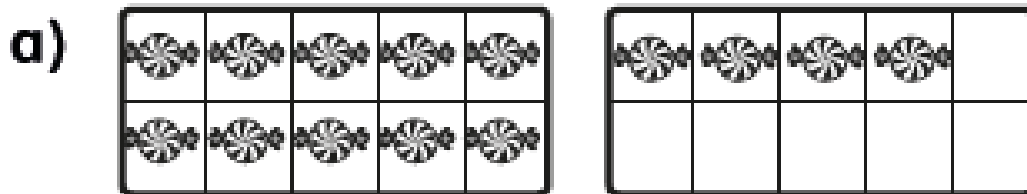



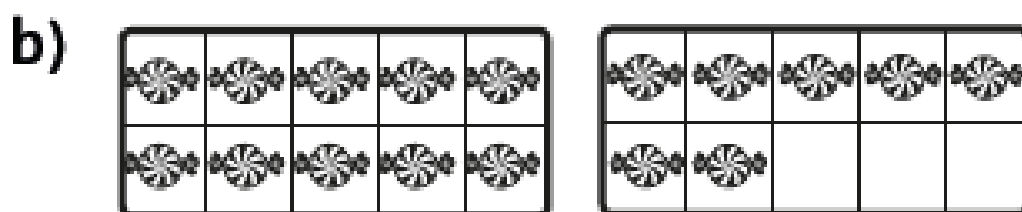
Tens and ones 1

1 Complete the sentences.




There is ten and ones.


There are  .



There is ten and ones.

There are  .

2 Show 16  .



Fill in the boxes.



a) 1 ten and 6 ones =

b) 19 = ten and ones

c) 10 = ten and ones

d) = 2 tens

e) 0 tens and 7 ones =



Complete the number sentence.

13 = ten and ones