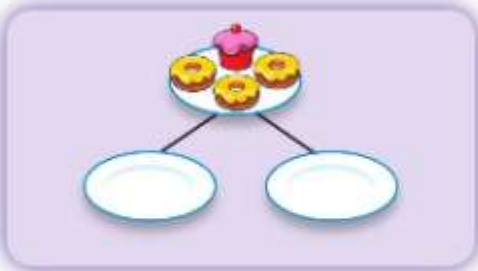


Thursday 7<sup>th</sup> January

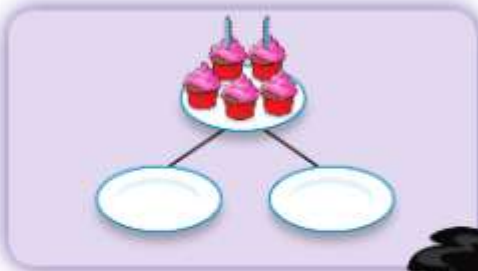
## Maths


Look at the pictures below and answer the questions underneath.

**1** Sort the whole into 2 parts.



**2** Sort the whole into 2 parts.







I will use  to help me.

I can see how to sort them.

- 🍌 What is the same and what is different?
- 🍌 What is the whole? How many parts do you need to sort into? What could the parts be?
- 🍌 Are there any other ways to sort the cakes?

Choose one of the chilli challenges below to complete.

 <p>Mild</p>	Cut out the pictures of cakes and doughnuts below or draw your own. Sort the whole into 2 parts. There are 3 to complete.
 <p>Spicy</p>	Cut out the pictures of cakes and doughnuts below or draw your own. Sort the whole into 2 parts. Find some counters (raisins, buttons etc). Can you represent the whole (up to 5) and sort the whole into 2 parts? What happens to the whole when you move the parts? [The whole stays the same]
 <p>Hot</p>	Find some counters e.g 2 different pasta shapes, 2 different coloured buttons etc. Can you sort the whole (up to 7) into 2 parts. What happens to the whole when you move the parts? [The whole stays the same] Are there any other ways you can sort the whole into 2 parts.



What happens to the whole when you move the parts? [The whole stays the same]  
How could you sort the whole into 2 parts?  
[colour, shape, size]

