

Comparing numbers of objects

1

Lena



Kai



a) Who has fewer  ? _____

b) Complete the number sentence.

$$12 \bigcirc 9$$

2

Lena



Kai




a) Who has fewer  ? _____

b) Complete the number sentence.

$$6 \bigcirc 11$$

3

Tess




Dan




a) Who has more  ? _____

b) Fill in the number sentence.



4

Tess



Dan



a) Who has more  ? _____

b) Fill in the number sentence.

