

Add by Making 10 - Wednesday

Mild



Think together

1

I have found

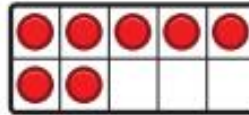
7 .



I have found

6 .

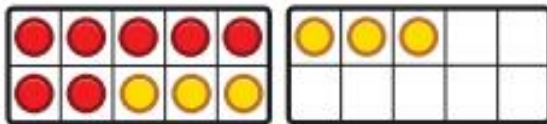
How many  did the children find in total?



$$7 + 3 = \square$$



3 more to
make 10.



$$10 + 3 = \square$$

Now you
have made
10, add 3.



$10 + 3$ is the
same as $7 + 6$.

$$\text{So } 7 + 6 = \square$$

The children found \square  in total.



2

I have found

8



.




I have found

6



.

How many  did the children find altogether?



$$8 + \square = \square$$

$$8 + 6 = \square$$


They found  altogether.


Spicy



I have found 8 .



I have found 6 .

How many  did the children find altogether?

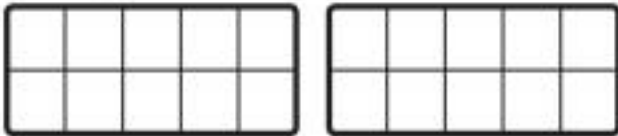


$$8 + \square = \square$$

$$8 + 6 = \square$$

They found  altogether.

Complete the additions.



a) $6 + 5 = \square$

b) $8 + 5 = \square$

c) $9 + 5 = \square$

d) $\square = 7 + 5$

We need to break up 5 for each one.



I can use these to make 10.



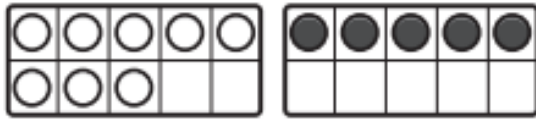
Hot



1 Work out $8 + 5$.

Use the

 to help you.



$$8 + \square = 10$$

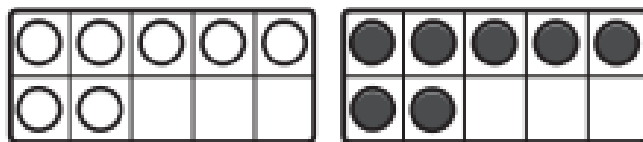
$$10 + \square = \square$$

$$8 + 5 = \square$$

First, I need to work out what makes 10.



2 Work out $7 + 7$.



$$7 + \square = 10$$

$$10 + \square = \square$$

$$7 + 7 = \square$$

3 Work out $8 + 6$.



$$8 + \square = 10$$

$$10 + \square = \square$$

$$8 + 6 = \square$$

Use the beads to help you.

