





Tuesday 12th January 2021




Maths

Warm up – Sing ‘10 little monkeys jumping on the bed’ counting down from 10.

Discover 




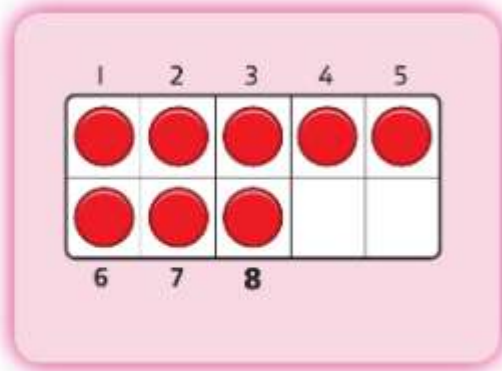
 How many spots does the  have?

-  How many spots does the butterfly have? Can you point to each spot as you count?
-  What can you use to represent the spots? [objects] How many have you got altogether?
-  How else could you represent the spots? What can you use to help you count?

Share



How many spots does the  have?



I will put  on a **ten frame**.





The  has 8 spots.








Using the Butterfly template or your own drawn butterfly, place the correct number of spots on the butterfly like in the picture [8]. Count each one as you place the counter on the butterfly.

Move the counters from the butterfly to your tens frame.

-  Can you point to and say each number aloud as you count? How many spots are there altogether?
-  Do you need to count all the counters on the ten frame? Can you see that 8 is 5 and 3 more?

Work your way through the activities. How spicy can you be today?

 <p>Mild</p>	 <p>Work with a partner. Use the butterfly template to place up to 8 counters on. Move the counters on to the 10 frame and tell your partner how many counters there are altogether.</p>
 <p>Spicy</p>	 <p>Using the ladybird template do this activity again counting up to 8 spots on the ladybird.</p>
 <p>Hot</p>	<p>Look at the numerals around the 10 frame. Can you read them all? Use counters and your ten frame to show all the things you can count in the 'Discover' picture. Does it matter where the empty spaces are in the 10 frame? [no] Sing 'I am an ant' song again introducing new creatures to the song.</p>