

Year 1-14th January

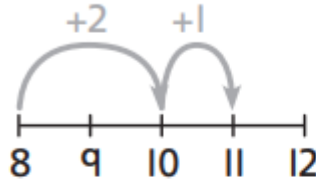
Mild/Spicy



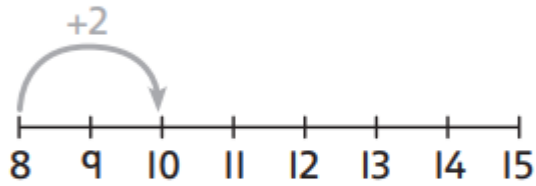
1 Complete these additions by making 10.

Use the number lines to help you.

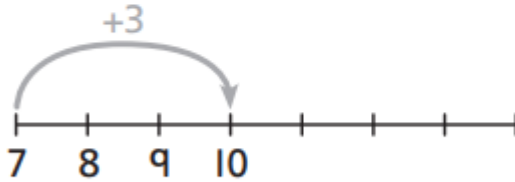
a) $8 + 3 = \square$



b) $8 + 6 = \square$



c) $7 + 5 = \square$



2

I have 9  .

Izzy

Charlie

I have 4  .

How many  do Izzy and Charlie have in total?

$\square + \square = \square$

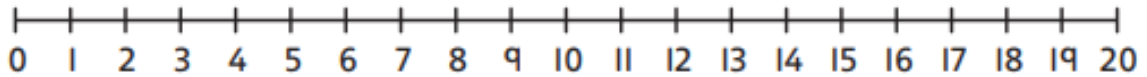


Hot

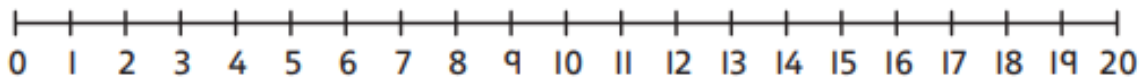


Complete these additions by making 10.

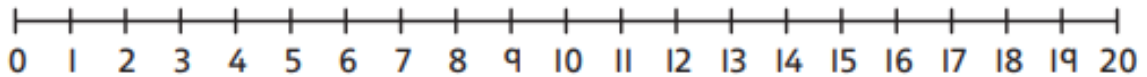
a) $5 + 9 = \square$



b) $3 + 9 = \square$



c) $9 + 9 = \square$



d) $\square = 7 + 6$

