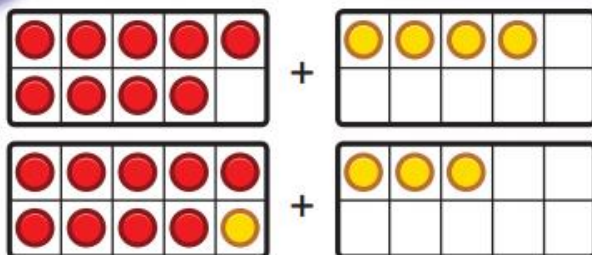


Share

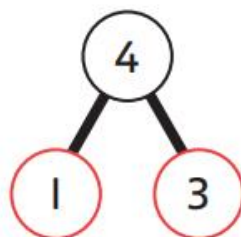
We need to work out $9 + 4$.

I will use ten frames.

a)

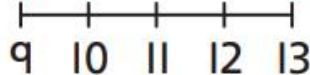


You can also use a number line.



Add 1 to make 10.

Then add the 3.

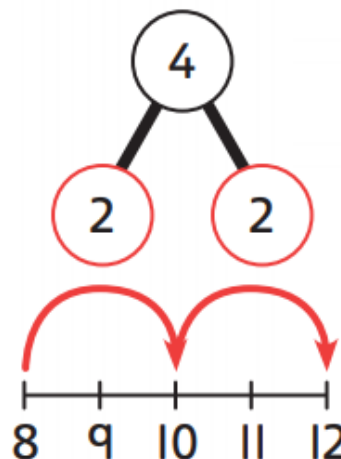


$9 + 4 = 13$

There are 13  in total.

b) $8 + 4 = 12$

There are 12  in total.



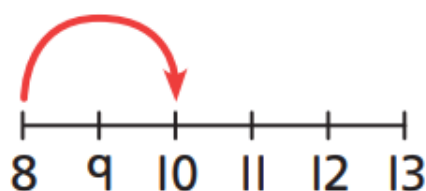
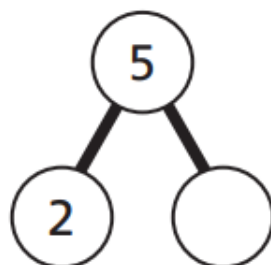



There are 8 bags in the lost property box.


How many bags are there altogether?

$$8 + \square = 10$$

There are bags in total.



There are 6  in the box.

How many  are there altogether?

$$\square + \square = \square$$

There are  in total.

