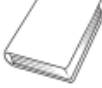


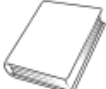


Year 1 – Addition word problems – Friday 15th Jan

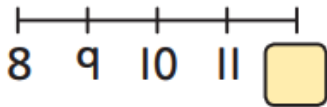
Use the methods you've learnt this week to help you solve these word problems

Mild

- 1 There are 8 yellow  on the shelf. 
The librarian finds 4 more yellow  .
How many yellow  are there in total now?



$$\square + \square = \square$$



There are yellow  in total now.

- 2 How many books has Seth read altogether?



$$6 + 1 = \square \quad \square + \square = \square$$

Seth has read books altogether.

Last term I read 6 books. This term I have read 11 books.



Seth

Spicy



Lucy and Seth are reading.



I know
number bonds
to 10 and 20.

Each book has 20 pages.

How many pages do they still have to read?

Lucy is on page 12.

$$2 + \square = 10$$

$$12 + \square = 20$$

Lucy has more
pages to read.

Seth is on page .

$$\square + \square = 10$$

$$\square + \square = 20$$

Seth has more
pages to read.



Hot

1 How many balls are there in total?

Bella has balls.

Oscar has balls.

$$\square + \square = \square$$



Bella



Oscar



There are balls in total.


2 There are 12 children at a party.

These children arrive.






How many children are at the party now?

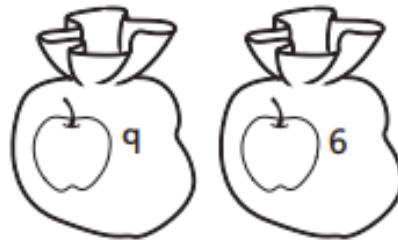
- 3 There are 15  in the box.
There are 3  outside the box.
How many are there in total?





There are  in total.

- 4 There are 9  in a bag.
There are 6  in another bag.
How many  are there in total?





There are  in total.