
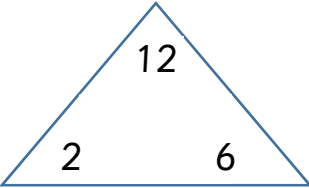

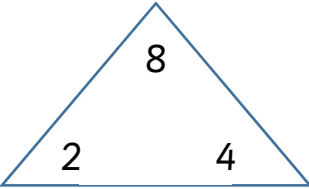

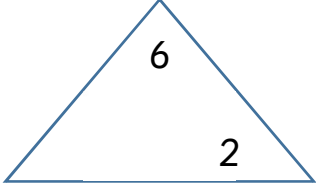
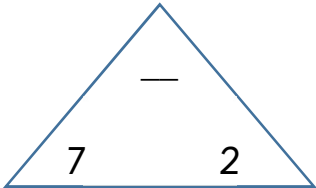


Name: \_\_\_\_\_

Date: \_\_\_\_\_

# I can find related facts – 2 times-table

Watch this video <https://youtu.be/ot64SUadFL0> and then have a go at these.

Draw it	Multiply it	Divide it	Add it	Fact family
	$2 \times 6 = 12$ $6 \times 2 = 12$	$12 \div 6 = 2$ $12 \div 2 = 6$	$6 + 6 = 12$ $2 + 2 + 2 + 2 + 2 + 2 = 12$	
	$4 \times 2 = \underline{\quad}$ $2 \times 4 = \underline{\quad}$	$8 \div 2 = 4$ $8 \div 4 = 2$	$\underline{\quad} + \underline{\quad} + \underline{\quad} + \underline{\quad} = \underline{\quad}$ $\underline{\quad} + \underline{\quad} = \underline{\quad}$	
	$\underline{\quad} \times \underline{\quad} = \underline{\quad}$ $\underline{\quad} \times \underline{\quad} = \underline{\quad}$	$6 \div 3 = \underline{\quad}$ $6 \div 2 = \underline{\quad}$	$\underline{\quad} + \underline{\quad} + \underline{\quad} = \underline{\quad}$ $\underline{\quad} + \underline{\quad} = \underline{\quad}$	
	$\underline{\quad} \times \underline{\quad} = \underline{\quad}$ $\underline{\quad} \times \underline{\quad} = \underline{\quad}$	$14 \div 7 = \underline{\quad}$ $\underline{\quad} \div \underline{\quad} = \underline{\quad}$	$2 + 2 + 2 + 2 + 2 + 2 + 2 = 14$ $\underline{\quad} + \underline{\quad} = \underline{\quad}$	

Now have a go at completing these fact families:

16
8      2
$8 \times 2 = 16$
$2 \times 8 = 16$
$16 \div 2 = 8$
$16 \div 8 = 2$

20
10      2
$\times =$
$\times =$
$\div =$
$\div =$

10
5      2
$\times =$
$\times =$
$\div =$
$\div =$

24
12      2
$\times =$
$\times =$
$\div =$
$\div =$

Mrs Ball has 4 cupcakes, but needs double that amount for a party. Write the number sentence and work out the answer she could use to help work out how many cupcakes she needs.



Mrs Braid has 22 sweets. She wants to share them between her children so needs to split this amount in half. Write the number sentence and work out how many sweets each child will have.

