

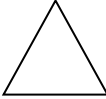




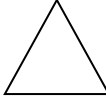
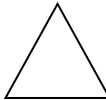


Name: \_\_\_\_\_ EARLY WORK 19.1.21

We are learning to solve problems with addition and subtraction.  
What is each shape worth?

You need to check each column and row would be correct.

			<b>= 11</b>
			<b>= 9</b>
			<b>= 10</b>
<b>= 6</b>	<b>= 11</b>	<b>= 13</b>	

